

**St. Ursula Girls' High School & Junior College, Nagpur**  
**FINAL EXAMINATION 2020**

Class : V (ADEF)

Time : 1.30 Hrs.

Subject : History + Civics

Marks : 25

**Q.1(A) Fill in the blanks :** **(2)**

1. That period, of which the tools that we find are mainly made from stone, is called the \_\_\_\_\_  
(Copper Age, Iron Age, Stone Age\_
2. \_\_\_\_\_ Dear Nashik is a well. Known old stone Age site in Maharashtra.  
(Gangapur, Sinnar, Chandwad)
3. Archaeological evidence shows that agriculture first began about 11,000 years ago in Israel and \_\_\_\_\_  
(Iran, Iraq, Dubai)
4. The houses at the beginning of the New stone Age were made of \_\_\_\_\_  
(earth, bricks, wattle and daub)

**Q. 2 A) Answer in one sentence (Any Three)** **(3)**

1. Which animals did the Homo sapiens mainly hunt?
2. What is the characteristic of the New stone Age?
3. Where did the people in the New stone Age establish their village settlements?
4. What articles were the Harappan craftsmen skilled at making?

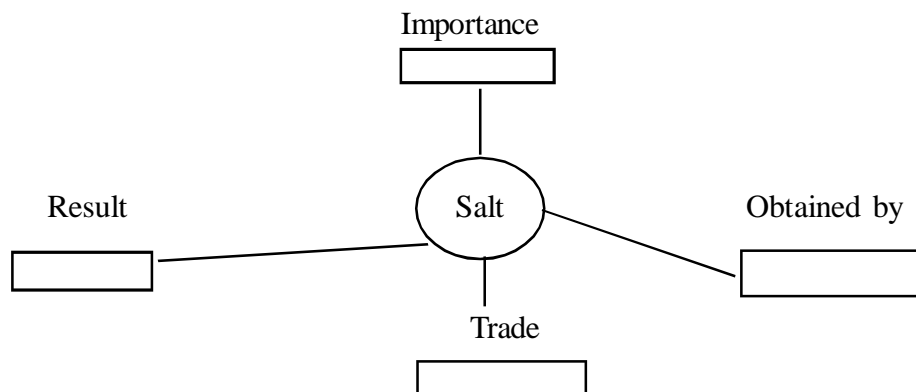
**B) Give reason (Any one)** **(2)**

1. The diet of Homo sapiens underwent a change.
2. Homo sapiens needed to stay in one place over longer periods of time.

**Q. 3. A) Answer in brief : (Any Two)** **(3)**

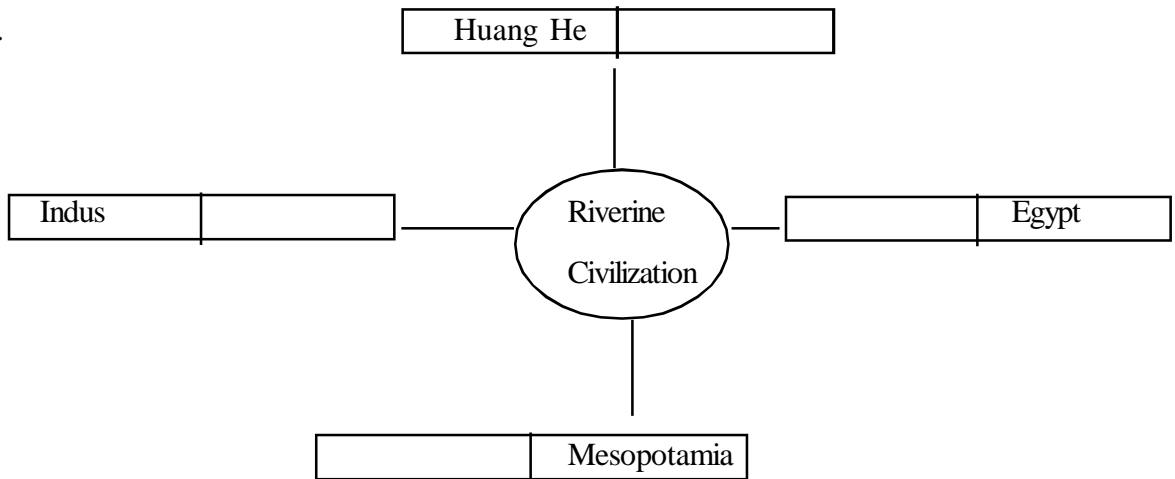
1. What are some of the well- known characteristics of Harappan cities?
2. How did man use the percussion technique?
3. What are the three main steps in the process of domesticating a wild animal?

**B) Complete the chart : (Any one)** **(2)**



OR

2.



**Q. 4 A) Arrange the following in chronological order.**

**(1)**

- a) 1) Copper                      2) Gold                      3) Iron  
1) \_\_\_\_\_                      2) \_\_\_\_\_                      3) \_\_\_\_\_
- b) 1) Copper                      2) Iron Age                      3) Stone Age  
1) \_\_\_\_\_                      2) \_\_\_\_\_                      3) \_\_\_\_\_

**B) Write notes on : (Any one)**


**(1)**

- 1) Use of metals  
2) Social organization in the ancient cities

**Q. 5 Observe the reconstructed picture of a Middle stone Age seasonal camp and answer the following (Any Two)**

**(1)**

- 1) Describe the structure of the houses in the picture.  
2) What materials are used to construct the houses?  
3) What kind of jobs could the people in the seasonal camps have been doing?



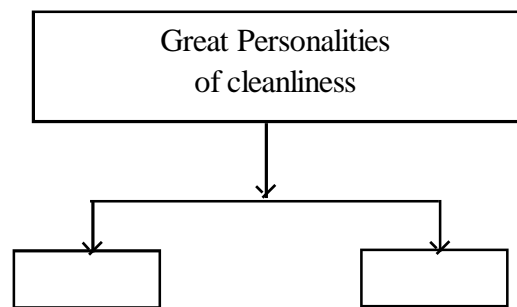
**Q. 1 Fill in the blanks :** (1)

1. Just as man is able to think, he is also \_\_\_\_\_
2. We must use the public facilities \_\_\_\_\_

**Q. 2. Answer in brief : (Any one)** (2)

1. What are the harmful effects of anger?
2. Which are the public services that we use?
3. How can an environment suitable for peace be created?

**Q. 3. Complete the chart :** (1)



**Q. 4. Write what will happen : (Any One)** (1)

1. If the boys and the girls are not given an equal right to education.
2. If the community does not help the school.